



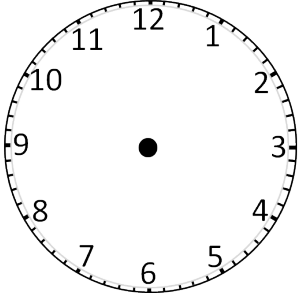
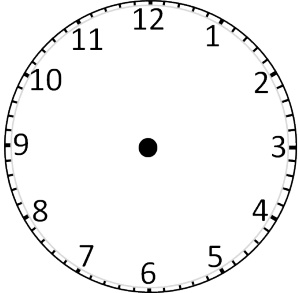
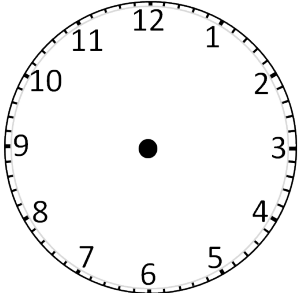
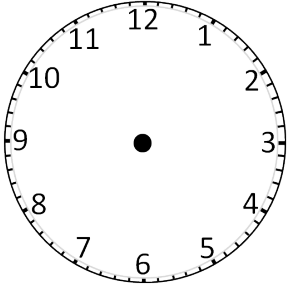
Task: Record and calculate information about your favourite TV programmes

Day	Programme Title	Time starts	Time ends	Length of programme	Channel
Monday					
Tuesday					
Wednesday					
Thursday					
Friday					
Saturday					
Sunday					



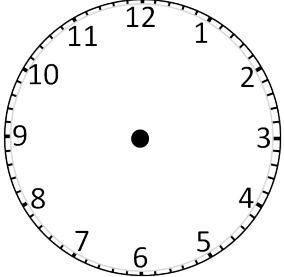
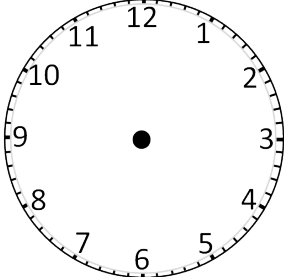
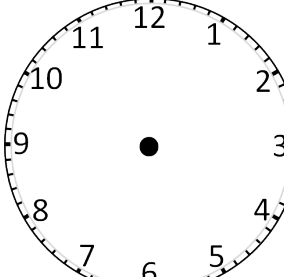
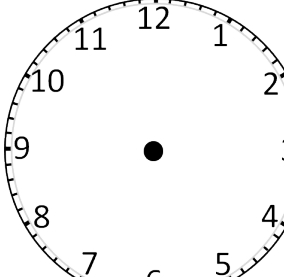
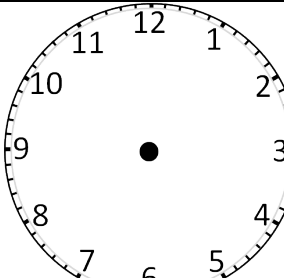
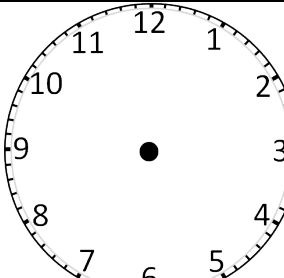
Task: Record and calculate information about your favourite programmes

**Please draw the clock hands on**

Day	Programme	Time starts	Time ends	Length of Programme
Monday				
Tuesday				

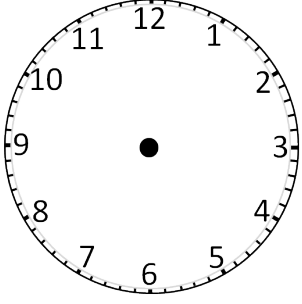
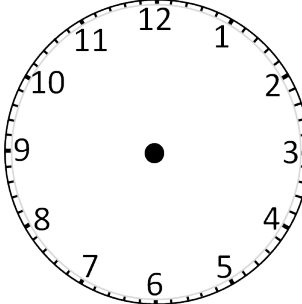
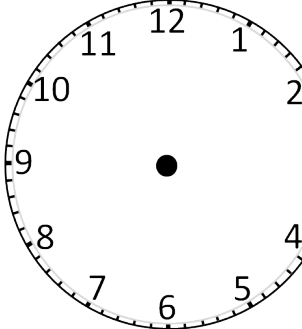
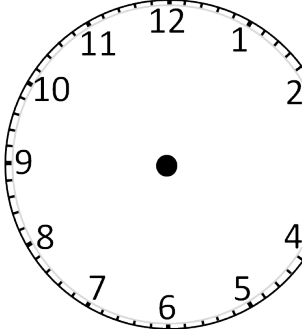
Clifford Holroyde Skills Base  
Home Learning Task 4  
Week Commencing 09/10/2017



Wednesday				
Thursday				
Friday				

Clifford Holroyde Skills Base  
Home Learning Task 4  
Week Commencing 09/10/2017



Saturday				
Sunday				



### Task 3: Solve these time problems

1. It is three o'clock pm. What time will it be in 2 hours time?
2. It is five o'clock am. What time will it be in 4 hours time?
3. I get home at 6 pm. I go to bed 3 hours later. What time will I go to bed?
4. I eat my breakfast at 8 o'clock in the morning. I start school one hour and later. What time do I start school?
5. On Thursday afternoon, we have History at half past one. We start Art one hour later. What time do we start art?
6. Playtime starts at 10.30. We play for 30 minutes. What time does playtime end?
7. School begins at 9 o'clock. It ends 6 and hours later. What time does school end?



8. Can you make up some word problem that are about time?

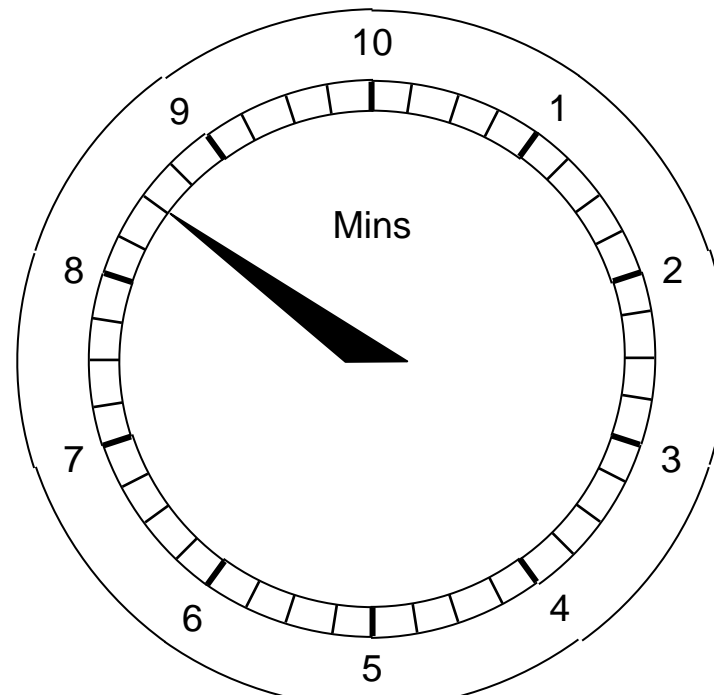
Task 4

A customer buys a microwave oven and is given a free ready to cook meal.

A diagram on the packet shows how long the meal takes to cook.

How long does the ready meal take to cook?

- A 8mins 20secs
- B 8mins 30secs
- C 8mins 40secs
- D 8mins 50secs




Clifford Holroyde Skills Base  
Home Learning Task 4  
Week Commencing 09/10/2017



It takes 75 minutes for Richard to drive home from his job at an electrical superstore.

The diagram shows the time on the clock in his car when he leaves the store.



What time does he arrive home?

- A 3:55pm
- B 5:55pm
- C 6:25pm
- D 7:25pm

**Clifford Holroyde Skills Base**  
**Home Learning Task 4**  
**Week Commencing 09/10/2017**



Lily and Charles are going to see an ice skating show.

The show starts at 7:30pm.

It runs for 2 hours 35 minutes.

What time does it finish?

- A 9:05pm
- B 9:35pm
- C 10:00pm
- D 10:05pm